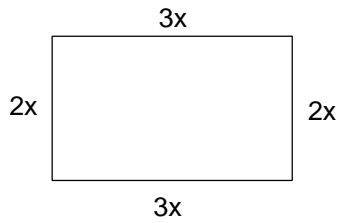
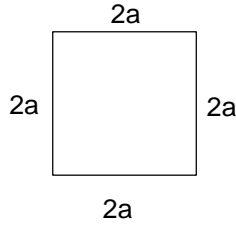


- 1 Form equations based on the perimeters of the following shapes and solve the equations.
Remember to look out for missing sides.

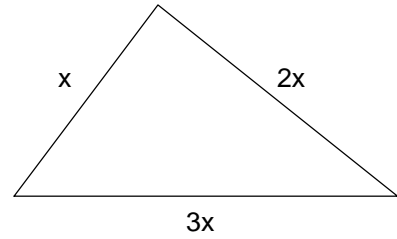
(i) Perimeter = 50 cm



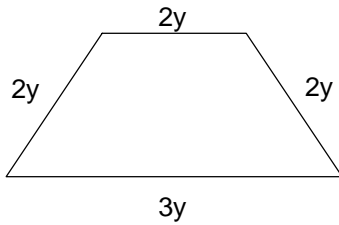
(ii) Perimeter = 24 cm



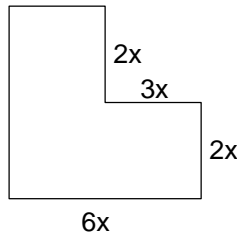
(iii) Perimeter = 42 cm



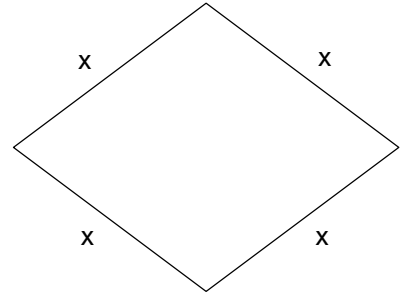
(iv) Perimeter = 45 cm



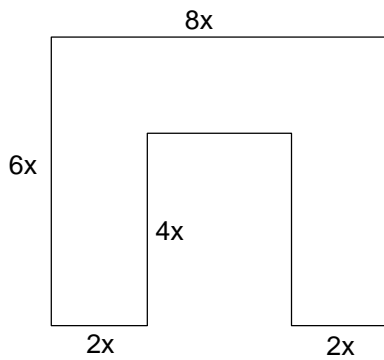
(v) Perimeter = 60 cm



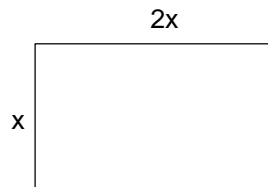
(vi) Perimeter = 14 cm



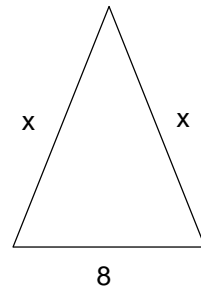
(vii) Perimeter = 72 cm



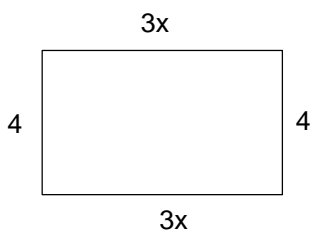
(viii) Perimeter = 15 cm



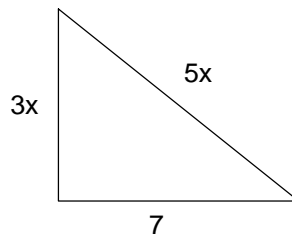
(ix) Perimeter = 28 cm



(x) Perimeter = 20 cm



(xi) Perimeter = 31 cm



(xii) Perimeter = 47 cm

