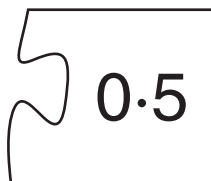
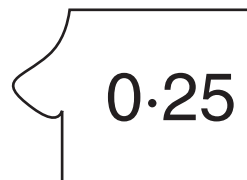
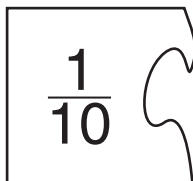



4 Cut out each jigsaw piece.


Try to match each jigsaw fraction with its jigsaw decimal.

 $0.5$


 $0.25$

 $\frac{1}{10}$

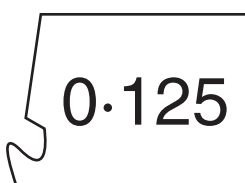
 $\frac{1}{4}$


 $\frac{1}{5}$

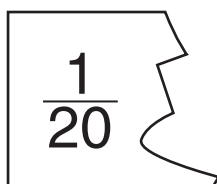
 $0.2$

 $\frac{1}{8}$

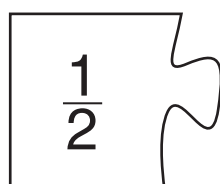
 $0.01$


 $0.125$

 $\frac{1}{100}$

 $\frac{1}{20}$

 $0.05$

 $\frac{1}{2}$

 $0.1$