



# START



If you land on a question, work it out and follow the instruction!



Go forward the solution to  $3 \times 2 - 1$




Go backward the solution to  $6 - 2 \times 1$

Go backward the solution to  $2 \times 2 + 3$




Go backward the solution to  $9 - 2 \times 3$





Go backward the solution to  $9 \times 2 - 14$



Go backward the solution to  $9 - 2 \times 3$



Go forward the solution to  $3 \times 2 - 2$



Go backward the solution to  $3 \times 2 + 2$



Go forward the solution to  $8 - 2 \times 2$



Go forward the solution to  $7 \times 2 - 13$




Go backward the solution to  $1 + 2 \times 3$



Go forward the solution to  $3 \times 2 - 1$



Go forward the solution to  $5 \times (2 - 1)$



Go backward the solution to  $(2 + 1) \times 2$

# START

